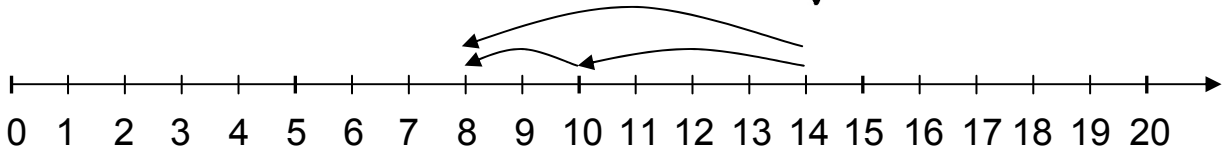


Name:

Klasse:

Datum:

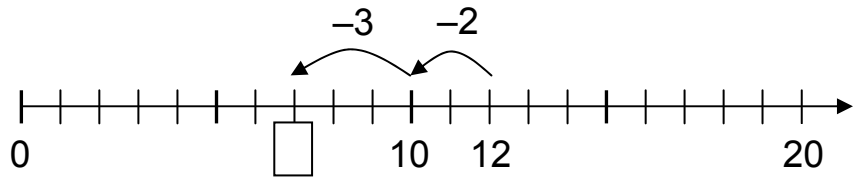
Aufgepasst! Jetzt springe ich rückwärts. Zwei kleine Sprünge für einen großen Sprung.



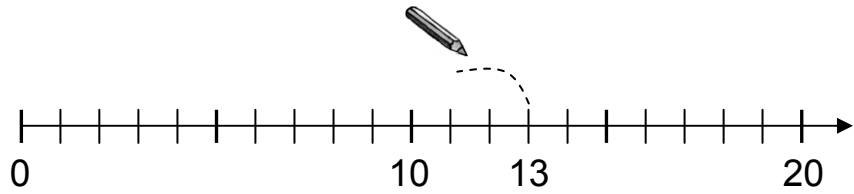
$$14 - 6 = 8$$

Zeichne die Sprünge ein und rechne.

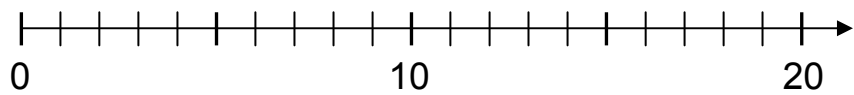
$$\begin{array}{r} 12 - 5 \\ \hline 12 - 2 = \square \\ \square - 3 = \square \\ \hline 12 - 5 = \square \end{array}$$



$$\begin{array}{r} 13 - 7 \\ \hline 13 - 3 = \square \\ \square - 4 = \square \\ \hline 13 - 7 = \square \end{array}$$



$$\begin{array}{r} 17 - 9 \\ \hline 17 - \square = \square \\ \square - \square = \square \\ \hline 17 - 9 = \square \end{array}$$



$$\begin{array}{r} 16 - 7 \\ \hline 16 - \square = \square \\ \square - \square = \square \\ \hline 16 - 7 = \square \end{array}$$

