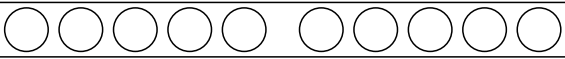
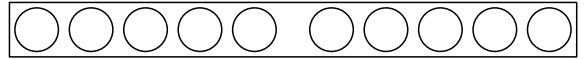


Name: _____

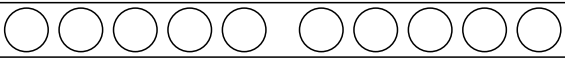
Tauschaufgabe 1



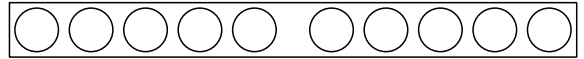
$1 + 4 = \square$



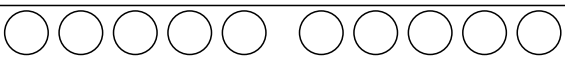
$2 + 3 = \square$



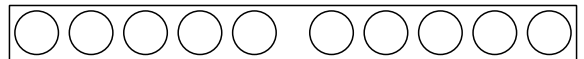
$4 + 1 = \square$



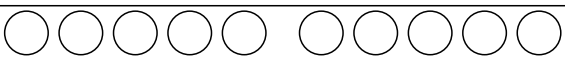
$3 + 2 = \square$



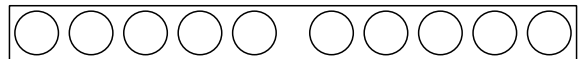
$6 + 0 = \square$



$4 + 2 = \square$



$0 + 6 = \square$



$2 + 4 = \square$

$1 + 2 = _$

$4 + 2 = _$

$4 + 1 = _$

$2 + 1 = _$

$2 + 4 = _$

$1 + 4 = _$

$1 + 5 = _$

$4 + 1 = _$

$2 + 1 = _$

$5 + 1 = _$

$1 + 4 = _$

$1 + 2 = _$

$4 + 1 = _$

$3 + 2 = _$

$1 + 2 = _$

$1 + 4 = _$

$2 + 3 = _$

$2 + 1 = _$

$4 + 2 = _$

$2 + 4 = _$

$1 + 3 = _$

$2 + 4 = _$

$4 + 2 = _$

$3 + 1 = _$

$3 + 2 = _$

$1 + 3 = _$

$1 + 5 = _$

$2 + 3 = _$

$3 + 1 = _$

$5 + 1 = _$

